

Please check the examination details below before entering your candidate information

Candidate surname

Other names

Centre Number

Candidate Number

--	--	--	--	--

--	--	--	--

Pearson Edexcel International GCSE (9–1)

Time 1 hour 15 minutes

Paper
reference

4CH1/2C

Chemistry

UNIT: 4CH1

PAPER: 2C

You must have:

Calculator, ruler

Total Marks

Instructions

- Use **black** ink or ball-point pen.
- **Fill in the boxes** at the top of this page with your name, centre number and candidate number.
- Answer **all** questions.
- Answer the questions in the spaces provided
– *there may be more space than you need.*
- Show all the steps in any calculations and state the units.

Information

- The total mark for this paper is 70.
- The marks for **each** question are shown in brackets
– *use this as a guide as to how much time to spend on each question.*

Advice

- Read each question carefully before you start to answer it.
- Write your answers neatly and in good English.
- Try to answer every question.
- Check your answers if you have time at the end.

Turn over ►

P70947A

©2022 Pearson Education Ltd.

Q:1/1/1/




Pearson

The Periodic Table of the Elements

1	2	3	4	5	6	7	0										
7 Li lithium 3	9 Be beryllium 4	11 Na sodium 11	12 Mg magnesium 12	13 Al aluminium 13	14 N nitrogen 7	15 P phosphorus 15	16 O oxygen 8	17 F fluorine 9	18 Ne neon 10								
19 K potassium 19	20 Ca calcium 20	21 Sc scandium 21	22 Ti titanium 22	23 V vanadium 23	24 Cr chromium 24	25 Mn manganese 25	26 Fe iron 26	27 Co cobalt 27	28 Ni nickel 28	29 Cu copper 29	30 Zn zinc 30	31 Ga gallium 31	32 Ge germanium 32	33 As arsenic 33	34 Se selenium 34	35 Br bromine 35	36 Kr krypton 36
37 Rb rubidium 37	38 Sr strontium 38	39 Y yttrium 39	40 Zr zirconium 40	41 Nb niobium 41	42 Mo molybdenum 42	[98] Tc technetium 43	44 Ru ruthenium 44	45 Rh rhodium 45	46 Pd palladium 46	47 Ag silver 47	48 Cd cadmium 48	49 In indium 49	50 Sn tin 50	51 Sb antimony 51	52 Te tellurium 52	53 I iodine 53	54 Xe xenon 54
55 Cs caesium 55	56 Ba barium 56	57 La* lanthanum 57	72 Hf hafnium 72	73 Ta tantalum 73	74 W tungsten 74	75 Re rhenium 75	76 Os osmium 76	77 Ir iridium 77	78 Pt platinum 78	79 Au gold 79	80 Hg mercury 80	81 Tl thallium 81	82 Pb lead 82	83 Bi bismuth 83	[209] Po polonium 84	[210] At astatine 85	[222] Rn radon 86
[223] Fr francium 87	[226] Ra radium 88	[227] Ac* actinium 89	[261] Rf rutherfordium 104	[262] Db dubnium 105	[266] Sg seaborgium 106	[264] Bh bohrium 107	[277] Hs hassium 108	[268] Mt meitnerium 109	[271] Ds darmstadtium 110	[272] Rg roentgenium 111	Elements with atomic numbers 112–116 have been reported but not fully authenticated						

1	H
hydrogen	1

relative atomic mass
atomic symbol
name
atomic (proton) number

* The lanthanoids (atomic numbers 58–71) and the actinoids (atomic numbers 90–103) have been omitted.

The relative atomic masses of copper and chlorine have not been rounded to the nearest whole number.



DO NOT WRITE IN THIS AREA

DO NOT WRITE IN THIS AREA

DO NOT WRITE IN THIS AREA

Answer ALL questions.

Some questions must be answered with a cross . If you change your mind about an answer, put a line through the box and then mark your new answer with a cross .

1 This question is about gases in the atmosphere.

The box gives the names of some gases.

argon	carbon dioxide	hydrogen
nitrogen	oxygen	water vapour

(a) Choose gases from the box to answer these questions.

(i) Identify the least reactive gas in the atmosphere.

(1)

(ii) Identify the most abundant gas in the atmosphere.

(1)

(iii) Identify the gas that is not normally found in the atmosphere.

(1)

(b) State an environmental problem caused by increasing amounts of carbon dioxide in the atmosphere.

(1)

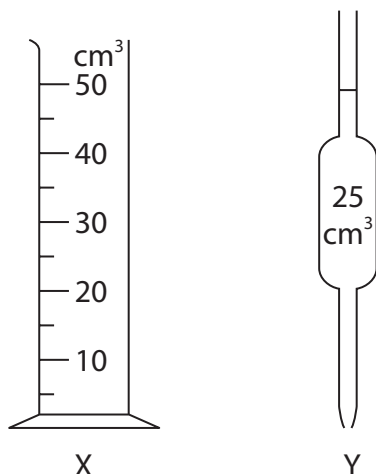
(c) Describe a test for carbon dioxide.

(2)

(Total for Question 1 = 6 marks)



2 (a) The diagram shows two pieces of apparatus, X and Y.



(i) Give the name of each piece of apparatus.

(2)

X

Y

(ii) In a titration, a student adds 25.0 cm³ of barium hydroxide solution to a conical flask.

Give a reason why it is better to use Y rather than X.

(1)

.....

.....

(b) The student uses methyl orange indicator in the titration.

(i) State the colour of methyl orange in barium hydroxide solution.

(1)

.....

(ii) Give a reason why universal indicator is **not** suitable for use in a titration.

(1)

.....

.....

.....



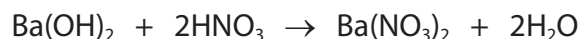
DO NOT WRITE IN THIS AREA

DO NOT WRITE IN THIS AREA

DO NOT WRITE IN THIS AREA

(c) The student adds some dilute nitric acid to a burette and does the titration.

The equation for the reaction is



The student finds that 21.50 cm³ of nitric acid of concentration 0.600 mol/dm³ neutralises 25.0 cm³ of barium hydroxide solution.

Calculate the concentration, in mol/dm³, of the barium hydroxide solution.

(3)

concentration = mol/dm³

(d) State why sulfuric acid would not be a suitable acid to use in this titration.

(1)

.....

.....

(Total for Question 2 = 9 marks)



P 7 0 9 4 7 A 0 5 2 0

3 This question is about Group 7, the halogens.

(a) Which halogen has the palest colour?

(1)

- A astatine
- B bromine
- C fluorine
- D iodine

(b) Which halogen is a solid at room temperature?

(1)

- A astatine
- B bromine
- C chlorine
- D fluorine

(c) The table shows the electronic configurations of a fluorine atom and a chlorine atom.

	Electronic configuration
fluorine	2.7
chlorine	2.8.7

Explain the relative reactivities of fluorine and chlorine using the information in the table.

(4)

.....

.....

.....

.....

.....

.....

.....

.....

.....



DO NOT WRITE IN THIS AREA

DO NOT WRITE IN THIS AREA

DO NOT WRITE IN THIS AREA

(d) Lithium reacts with chlorine to form lithium chloride.

(i) Write a chemical equation for the reaction of lithium with chlorine. (1)

(ii) Describe tests to show that the product of the reaction is lithium chloride. (5)

(Total for Question 3 = 12 marks)



4 This question is about magnesium and magnesium compounds.

(a) Magnesium burns in oxygen to form magnesium oxide.

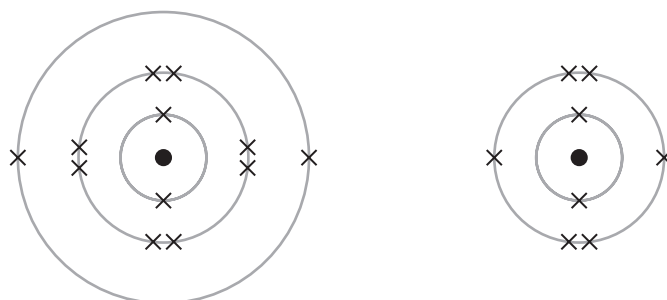
State two observations that would be seen during the reaction.

(2)

1

2

(b) The diagram shows the electron configurations of a magnesium atom and an oxygen atom.



magnesium atom

oxygen atom

Describe the changes in the electronic configurations when magnesium reacts with oxygen to form the ionic compound magnesium oxide, MgO

(2)

.....

.....

.....

.....

.....

.....

(c) Magnesium can be produced by the electrolysis of molten magnesium chloride.

(i) State why magnesium cannot be produced by heating magnesium oxide with carbon.

(1)

.....

.....



(ii) Explain the different ways that magnesium and magnesium chloride conduct electricity.

(4)

magnesium

.....

.....

.....

.....

.....

.....

magnesium chloride

.....

.....

.....

.....

.....

.....

(d) During the electrolysis of molten magnesium chloride, magnesium is formed at the negative electrode.

The ionic half-equation for the reaction is



(i) State why this is a reduction reaction.

(1)

.....

.....

(ii) Write an ionic half-equation for the formation of chlorine at the positive electrode.

(1)

.....

(Total for Question 4 = 11 marks)

DO NOT WRITE IN THIS AREA

DO NOT WRITE IN THIS AREA

DO NOT WRITE IN THIS AREA



P 7 0 9 4 7 A 0 9 2 0

5 (a) An organic compound has this percentage composition by mass.

$$\text{C} = 40\% \quad \text{H} = 6.7\% \quad \text{O} = 53.3\%$$

(i) Show that the empirical formula of the compound is CH_2O

(2)

(ii) Draw the structural formula of a compound with the molecular formula $\text{C}_2\text{H}_4\text{O}_2$

(1)

DO NOT WRITE IN THIS AREA

DO NOT WRITE IN THIS AREA


DO NOT WRITE IN THIS AREA



(b) Methanoic acid (HCOOH) reacts with sodium carbonate solution to give three products.

(i) Complete the equation for this reaction.

(2)

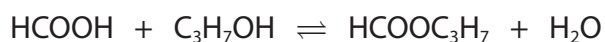


(ii) State what you would observe in this reaction.

(1)

(c) Methanoic acid also reacts with propanol to form an ester.

The equation for the reaction is



(i) Give the name of the ester that forms.

(1)

(ii) State what is meant by the \rightleftharpoons symbol.

(1)

(iii) When this reaction occurs in a sealed container, the reaction can reach dynamic equilibrium.

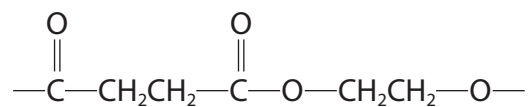
Give one characteristic of a reaction at dynamic equilibrium.

(1)



(d) A polyester forms when butanedioic acid reacts with ethanediol.

The diagram shows the repeat unit of the polyester that forms.



(i) Give the name of this type of polymerisation. (1)

(ii) Draw the structural formulae of the two monomers used to make this polyester. (2)

--	--

(Total for Question 5 = 12 marks)



6 Titanium is an important metal in industry.

Titanium dioxide (TiO_2) can be converted into titanium metal in two stages.

Stage 1 titanium dioxide is converted into titanium(IV) chloride (TiCl_4)

Stage 2 titanium(IV) chloride is converted into titanium

(a) This is the equation for the reaction in stage 1.



Calculate the volume, in dm^3 , of chlorine gas at rtp needed to react completely with 20 tonnes of titanium dioxide.

Give your answer in standard form.

[1 tonne = 10^6 g M_r of $\text{TiO}_2 = 80$]

[molar volume of chlorine gas at rtp = 24 dm^3]

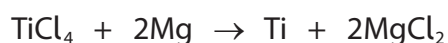
(4)

volume of chlorine gas = dm^3



(b) In stage 2, titanium(IV) chloride vapour is passed through molten magnesium in a container filled with argon.

This is the equation for the reaction in stage 2.



Explain why the container is filled with argon rather than air.

(2)

.....

.....

.....

.....

(c) Aeroplanes are made of an alloy containing aluminium and titanium.

Explain why the alloy is stronger than pure titanium metal.

You may include diagrams in your answer.

(3)

.....

.....

.....

.....

.....

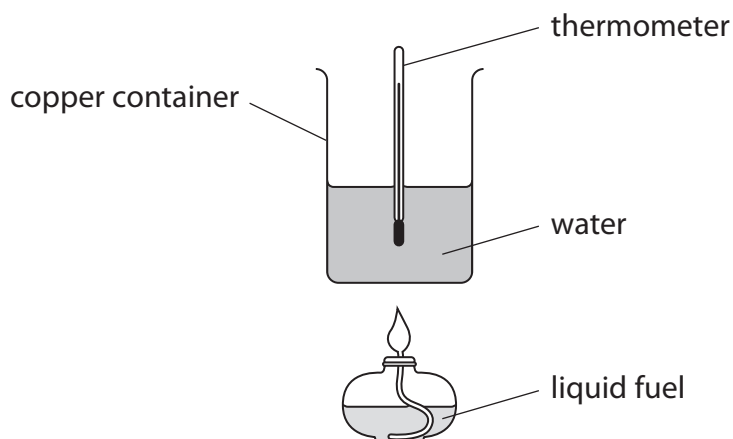
.....

.....

(Total for Question 6 = 9 marks)



7 A student uses this apparatus to find the heat energy supplied by a liquid fuel.



The student burns some fuel to heat the water in the copper container and measures the change in temperature.

(a) The student notices that the bottom of the container turns black.

Give the name of the black substance that forms on the bottom of the container.

(1)

(b) In one experiment, the student burns 0.92 g of ethanol.

The student calculates that the heat energy absorbed by the water is 18.2 kJ.

Show that the results of this experiment give an approximate value for the enthalpy of combustion of ethanol of $\Delta H = -900$ kJ/mol.

[M_r of ethanol = 46]

(2)

(c) The data book value of ΔH for the combustion of ethanol is -1367 kJ/mol .

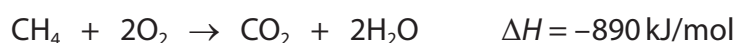
Give two reasons why the student's value is much lower than the data book value.

(2)

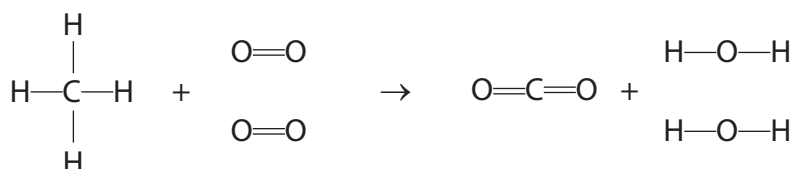
1

2

(d) The equation shows the combustion of methane.



This is the equation showing the displayed formulae.



The table shows the bond energies for $\text{O}=\text{O}$, $\text{C}=\text{O}$ and $\text{O}-\text{H}$

Bond	$\text{O}=\text{O}$	$\text{C}=\text{O}$	$\text{O}-\text{H}$
Bond energy in kJ/mol	498	805	463



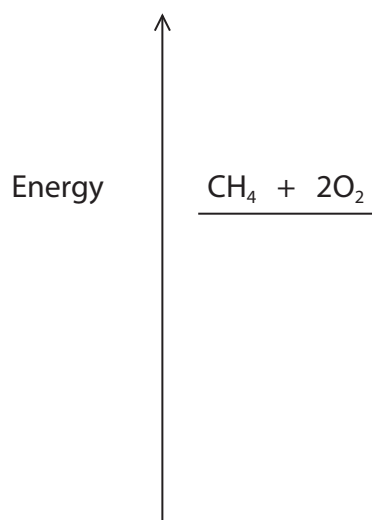
- (i) Calculate the bond energy of the C—H bond, using information from the equation and the table.

(4)

C—H bond energy = kJ/mol

- (ii) Complete the energy level diagram to show the products and ΔH .

(2)



(Total for Question 7 = 11 marks)

TOTAL FOR PAPER = 70 MARKS

